



Name :

Date :

Grade : II

Worksheet

Submission Date :

Subject : Math

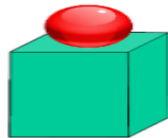
Parent's sign :

Lines and Shapes

I. Circle the right answer.

1. I am a shape with 4 corners. All my sides are equal. I am a square/rectangle/triangle/circle.
2. I am a shape with no corners. I am a square/rectangle/triangle/circle.
3. I am a shape with 3 corners. I am a square/rectangle/triangle/circle.
4. I am a shape with 4 corners. Two of my opposite sides are long and equal and two of my opposite sides are short and equal. I am a square/rectangle/triangle/circle.

II. Identify the two shapes in each picture and fill in the boxes with the names.

III. Circle the correct answer



1. How many triangles are there in the figure?

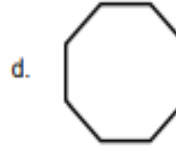
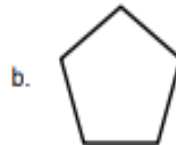
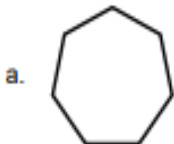
a. 13

b. 15

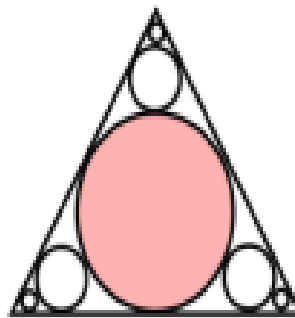
c. 11

d. 19

2. Which of the following shapes has the maximum number of sides?



3. How many circles are there in the picture?



a. 5

b. 6

c. 7

d. 8